



**MATHS**


**Task 1.**

Count to twenty and back. Name each number ...

13	15	14	16	17	11	18	20	14	19	12
----	----	----	----	----	----	----	----	----	----	----

# Beanstalk Numbers

Can you write the numbers from 11 to 20 on the beanstalk?




**Task 2.**

**Subtraction.**

**Make some beanstalk leaves out of paper. Number them 1-10.**

**Pretend to be Jack climbing down the beanstalk and solve...**



$8 - 3 =$

$6 - 4 =$

$7 - 3 =$

$5 - 2 =$

$9 - 5 =$

$8 - 4 =$

**Challenge**

**Make some more beanstalk leaves 11-20 Now solve...**

$12 - 5 =$

$13 - 4 =$

$11 - 6 =$

$18 - 6 =$

$17 - 5 =$


$16 - 7 =$

## WRITING

Task 1.

Enjoy Jack and the Beanstalk... <https://www.youtube.com/watch?v=oyYh43hxSts>

What does the Giant say? Write in the speech bubble.





## READING/SPELLING/PHONICS

### Task 1.

Phase 3 Tricky words: Tick the words which you can read.

Read      he she we me be was you  
                 they all are my

Play Bingo with the words.

Write three down.

Ask an adult to say each word and tick off when you hear your words.

Don't forget to shout Bingo!

Task 2. Match the picture to the correct caption.



I can see a pair of boots on the mat.



It has been hot this year.



The farmer gets up at six in the morning.



Lee had a chat with his dad.

Write a caption for each picture.



